

**Mathematical studies**  
**Standard level**  
**Paper 2**

Thursday 3 May 2018 (morning)

1 hour 30 minutes

---

**Instructions to candidates**

- Do not open this examination paper until instructed to do so.
- A graphic display calculator is required for this paper.
- A clean copy of the **mathematical studies SL formula booklet** is required for this paper.
- Answer all the questions in the answer booklet provided.
- Unless otherwise stated in the question, all numerical answers should be given exactly or correct to three significant figures.
- The maximum mark for this examination paper is **[90 marks]**.

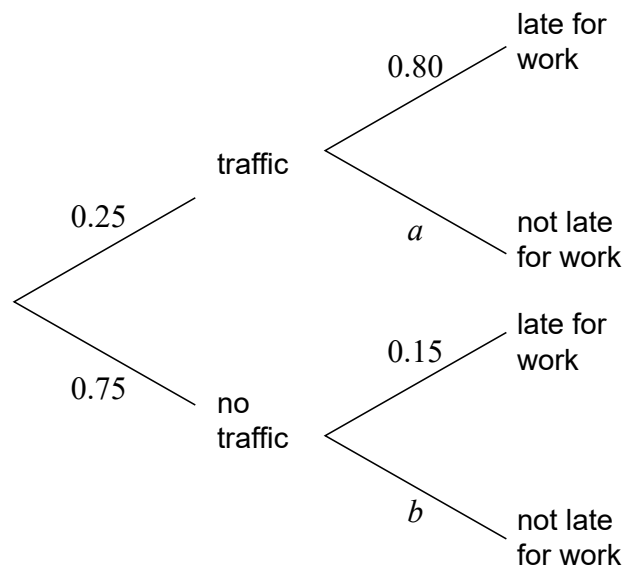
Answer **all** questions in the answer booklet provided. Please start each question on a new page. You are advised to show all working, where possible. Where an answer is incorrect, some marks may be given for a correct method, provided this is shown by written working. Solutions found from a graphic display calculator should be supported by suitable working, for example, if graphs are used to find a solution, you should sketch these as part of your answer.

1. [Maximum mark: 16]

In a company it is found that 25% of the employees encountered traffic on their way to work. From those who encountered traffic the probability of being late for work is 80%.

From those who did not encounter traffic, the probability of being late for work is 15%.

The tree diagram illustrates the information.



(a) Write down the value of

(i)  $a$ ;

(ii)  $b$ .

[2]

(b) Use the tree diagram to find the probability that an employee

(i) encountered traffic and was late for work;

(ii) was late for work;

(iii) encountered traffic given that they were late for work.

[8]

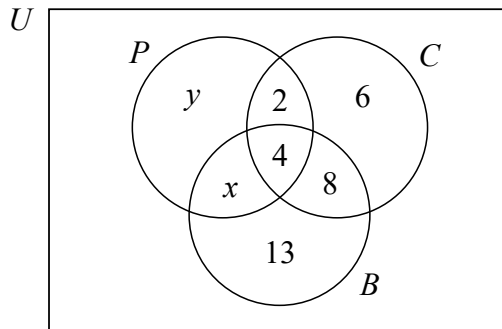
(This question continues on the following page)

**(Question 1 continued)**

The company investigates the different means of transport used by their employees in the past year to travel to work. It was found that the three most common means of transport used to travel to work were public transportation ( $P$ ), car ( $C$ ) and bicycle ( $B$ ).

The company finds that 20 employees travelled by car, 28 travelled by bicycle and 19 travelled by public transportation in the last year.

Some of the information is shown in the Venn diagram.



(c) Find the value of

(i)  $x$ ;

(ii)  $y$ .

[2]

There are 54 employees in the company.

(d) Find the number of employees who, in the last year, did not travel to work by car, bicycle or public transportation.

[2]

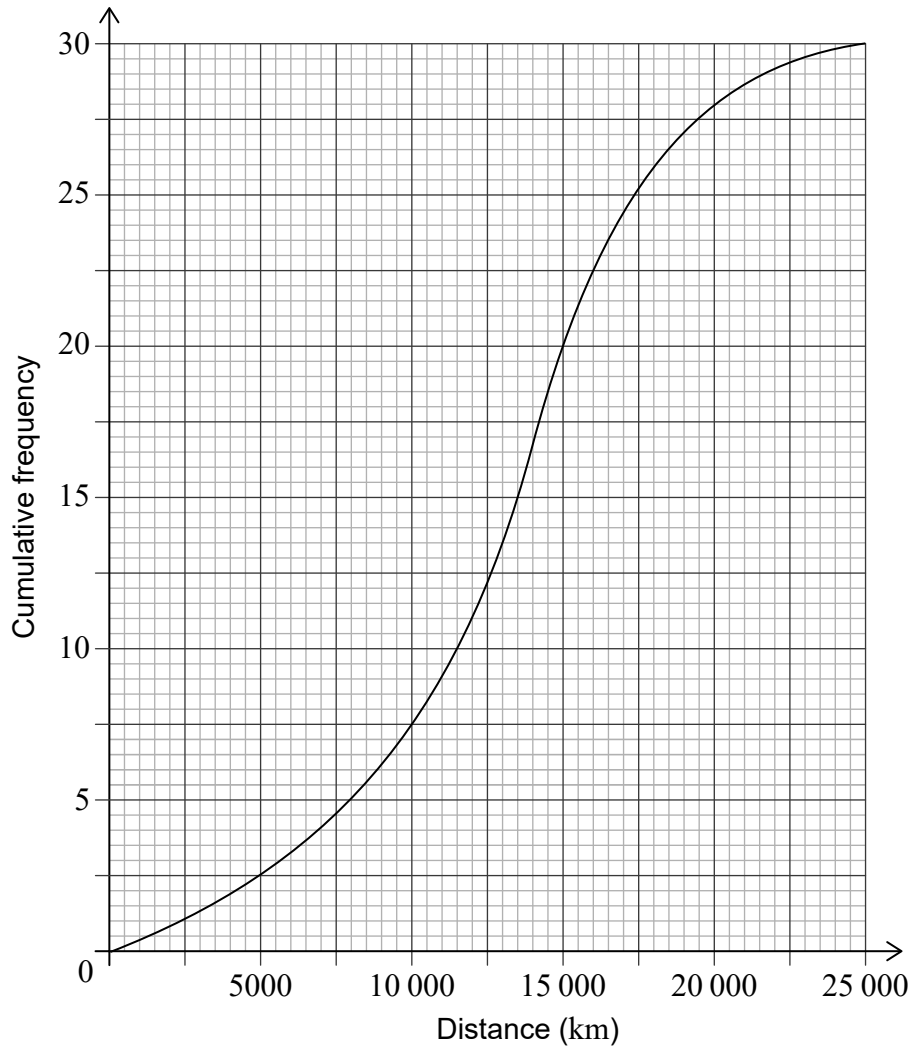
(e) Find  $n((C \cup B) \cap P')$ .

[2]

Turn over

2. [Maximum mark: 15]

A transportation company owns 30 buses. The distance that each bus has travelled since being purchased by the company is recorded. The cumulative frequency curve for these data is shown.



(a) Find the number of buses that travelled a distance between 15 000 and 20 000 kilometres.

[2]

(b) Use the cumulative frequency curve to find the

(i) median distance;

(ii) lower quartile;

(iii) upper quartile.

[4]

(This question continues on the following page)

**(Question 2 continued)**

(c) Hence write down the interquartile range. [1]

(d) Write down the percentage of buses that travelled a distance greater than the upper quartile. [1]

(e) Find the number of buses that travelled a distance less than or equal to 12 000 km. [1]

It is known that 8 buses travelled more than  $m$  kilometres.

(f) Find the value of  $m$ . [2]

The smallest distance travelled by one of the buses was 2500 km.  
The longest distance travelled by one of the buses was 23 000 km.

(g) **On graph paper**, draw a box-and-whisker diagram for these data. Use a scale of 2 cm to represent 5000 km. [4]

3. [Maximum mark: 14]

The weight,  $W$ , of basketball players in a tournament is found to be normally distributed with a mean of 65 kg and a standard deviation of 5 kg.

- (a) (i) Find the probability that a basketball player has a weight that is less than 61 kg.

In a training session there are 40 basketball players.

- (ii) Find the expected number of players with a weight less than 61 kg in this training session. [4]
- (b) The probability that a basketball player has a weight that is within 1.5 standard deviations of the mean is  $q$ .
- (i) Sketch a normal curve to represent this probability.
- (ii) Find the value of  $q$ . [3]
- (c) Given that  $P(W > k) = 0.225$ , find the value of  $k$ . [2]

A basketball coach observed 60 of her players to determine whether their performance and their weight were independent of each other. Her observations were recorded as shown in the table.

		Performance	
		Satisfactory	Excellent
Weight	Below average	6	10
	Average	7	15
	Above average	12	10

She decided to conduct a  $\chi^2$  test for independence at the 5% significance level.

- (d) For this test,
- (i) state the null hypothesis; [1]
- (ii) find the  $p$ -value. [2]
- (e) State a conclusion for this test. Justify your answer. [2]

4. [Maximum mark: 16]

A new café opened and during the first week their profit was \$60.

The café's profit increases by \$10 every week.

(a) Find the café's profit during the 11th week. [3]

(b) Calculate the café's **total** profit for the first 12 weeks. [3]

A new tea-shop opened at the same time as the café. During the first week their profit was also \$60.

The tea-shop's profit increases by 10% every week.

(c) Find the tea-shop's profit during the 11th week. [3]

(d) Calculate the tea-shop's **total** profit for the first 12 weeks. [3]

In the  $m$ th week the tea-shop's **total** profit exceeds the café's **total** profit, for the first time since they both opened.

(e) Find the value of  $m$ . [4]

Turn over

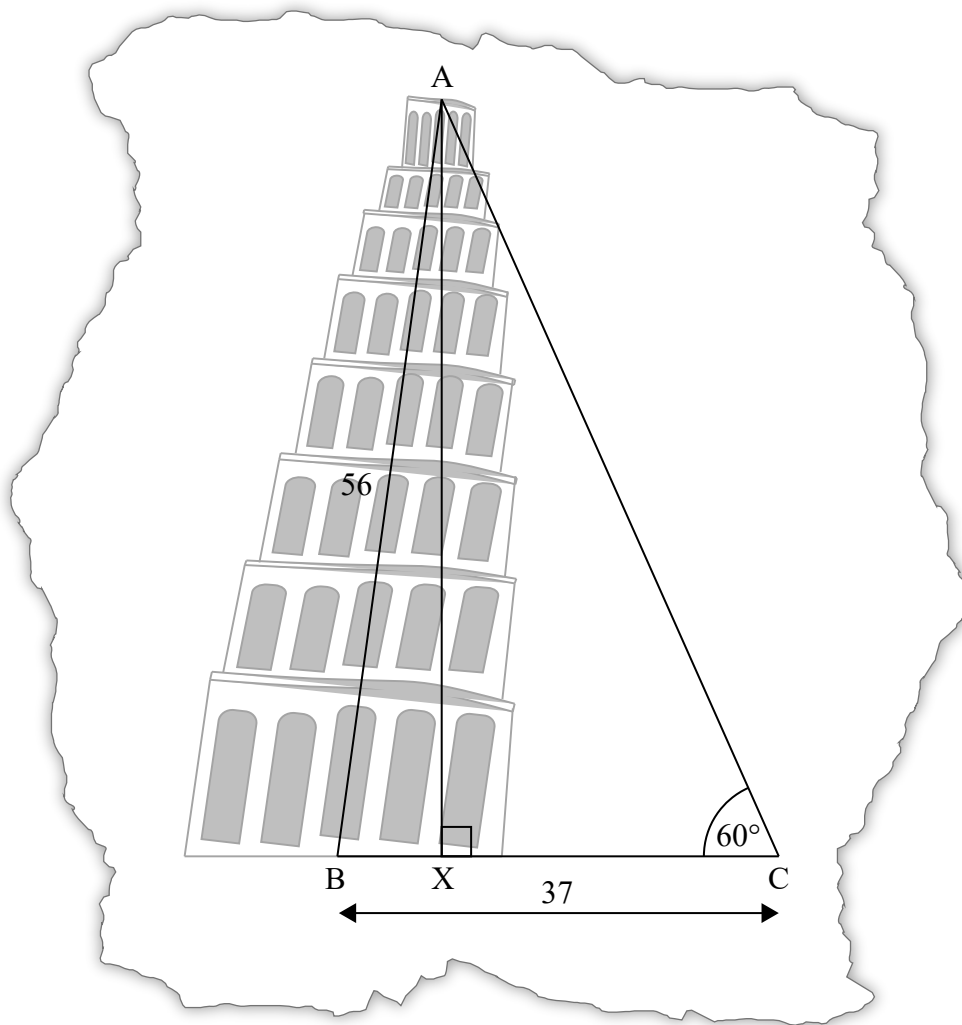
5. [Maximum mark: 14]

The Tower of Pisa is well known worldwide for how it leans.

Giovanni visits the Tower and wants to investigate how much it is leaning. He draws a diagram showing a non-right triangle,  $ABC$ .

On Giovanni's diagram the length of  $AB$  is 56 m, the length of  $BC$  is 37 m, and angle  $ACB$  is  $60^\circ$ .  $AX$  is the perpendicular height from  $A$  to  $BC$ .

diagram not to scale



- (a) Use Giovanni's diagram to
  - (i) show that angle  $ABC$ , the angle at which the Tower is leaning relative to the horizontal, is  $85^\circ$  to the nearest degree.
  - (ii) calculate the length of  $AX$ .
  - (iii) find the length of  $BX$ , the horizontal displacement of the Tower.

[9]

(This question continues on the following page)



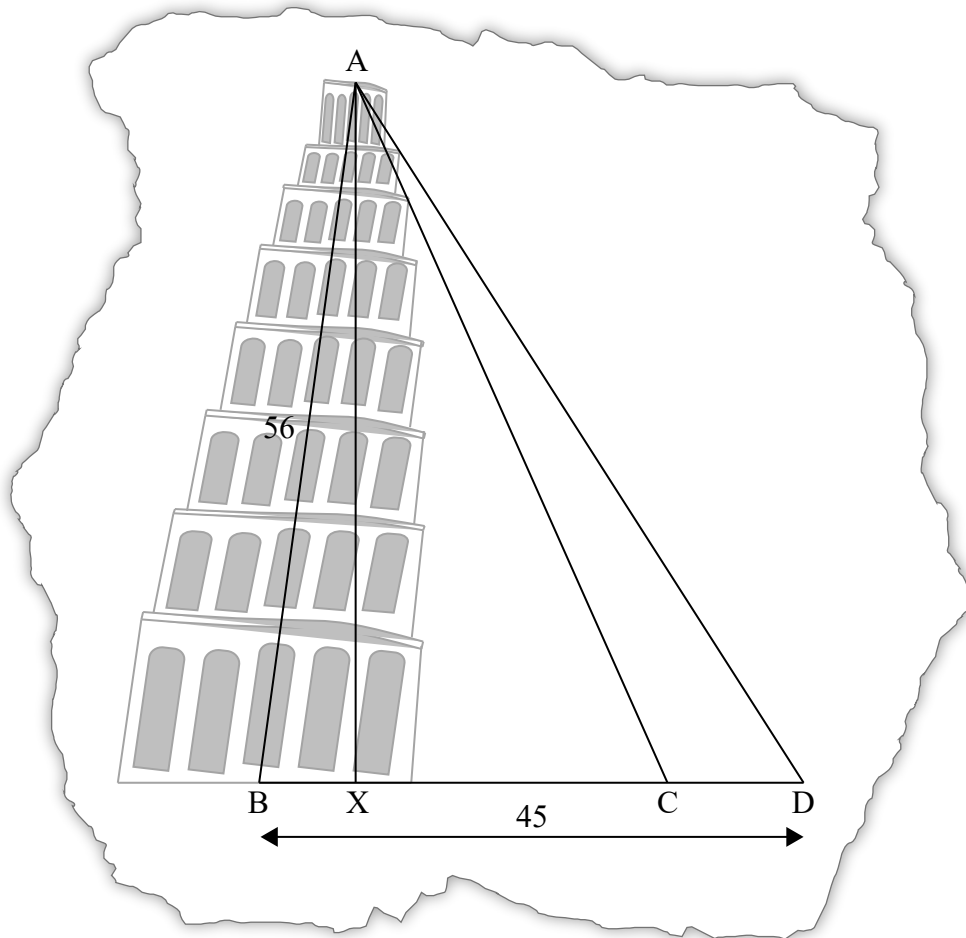
**(Question 5 continued)**

Giovanni's tourist guidebook says that the actual horizontal displacement of the Tower, BX, is 3.9 metres.

- (b) Find the percentage error on Giovanni's diagram. [2]

Giovanni adds a point D to his diagram, such that  $BD = 45$  m, and another triangle is formed.

**diagram not to scale**



- (c) Find the angle of elevation of A from D. [3]

**Turn over**

6. [Maximum mark: 15]

Consider the curve  $y = 2x^3 - 9x^2 + 12x + 2$ , for  $-1 < x < 3$ .

(a) Sketch the curve for  $-1 < x < 3$  and  $-2 < y < 12$ . [4]

(b) A teacher asks her students to make some observations about the curve.

Three students responded.

**Nadia** said “The  $x$ -intercept of the curve is between  $-1$  and zero”.

**Rick** said “The curve is decreasing when  $x < 1$ ”.

**Paula** said “The gradient of the curve is less than zero between  $x = 1$  and  $x = 2$ ”.

State the name of the student who made an **incorrect** observation. [1]

(c) Find the value of  $y$  when  $x = 1$ . [2]

(d) Find  $\frac{dy}{dx}$ . [3]

(e) Show that the stationary points of the curve are at  $x = 1$  and  $x = 2$ . [2]

(f) Given that  $2x^3 - 9x^2 + 12x + 2 = k$  has **three** solutions, find the possible values of  $k$ . [3]